





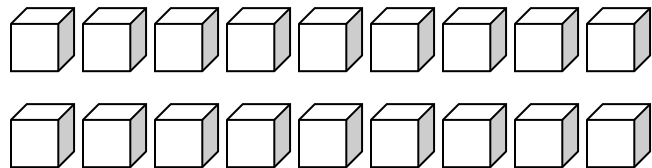
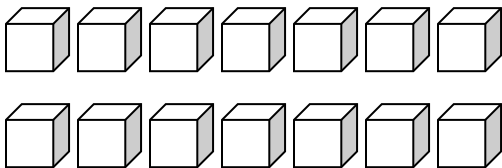
EQUAL AND UNEQUAL SETS

NAME _____

1. Circle the set that is not equal in number to the other sets.





2. Look at the 2 sets below. Are they equal or unequal? How do you know?



They are _____. I know they are _____ because _____

3. Show how you can make the unequal sets below equal.



4. Draw a picture of 2 sets of objects that are equal.